

Intro. to DNA / worksheet

1. What were the names of the people responsible for figuring out DNA's structure?

1. _____

2. _____

3. _____

4. _____

2. What happened between Watson & Crick and Rosalind Franklin? _____

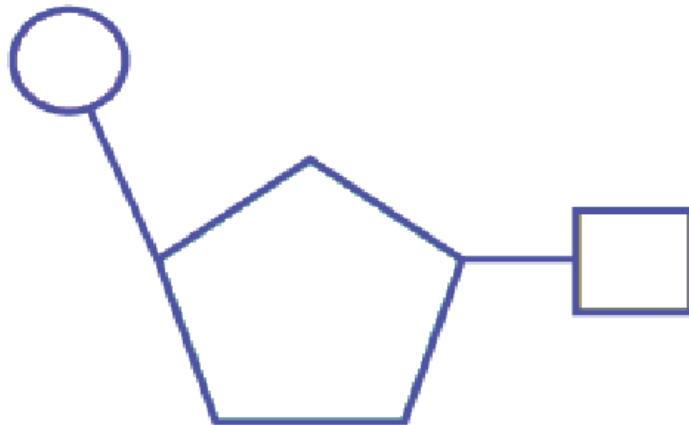
3. Write out the complete name for DNA: _____

4. A nucleotide is made of three parts. List these parts below and label them on the picture:




1. _____

2. _____

3. _____



5. On the diagram, color label the as indicated below:

- Color the thymines orange. 
- Color the adenines green. 
- Color the guanines purple. 
- Color the cytosines yellow. 